

Paper Reference 4EC1/01
Pearson Edexcel
International GCSE

Economics

Level 1/2

PAPER 1: Microeconomics and Business Economics

Data Booklet

In the boxes below, write your name, centre number and candidate number.

| | | | | | |
|------------------|--|--|--|--|--|
| Surname | | | | | |
| Other names | | | | | |
| Centre Number | | | | | |
| Candidate Number | | | | | |

INSTRUCTIONS

There may be spare copies of some data sheets in case you need them.

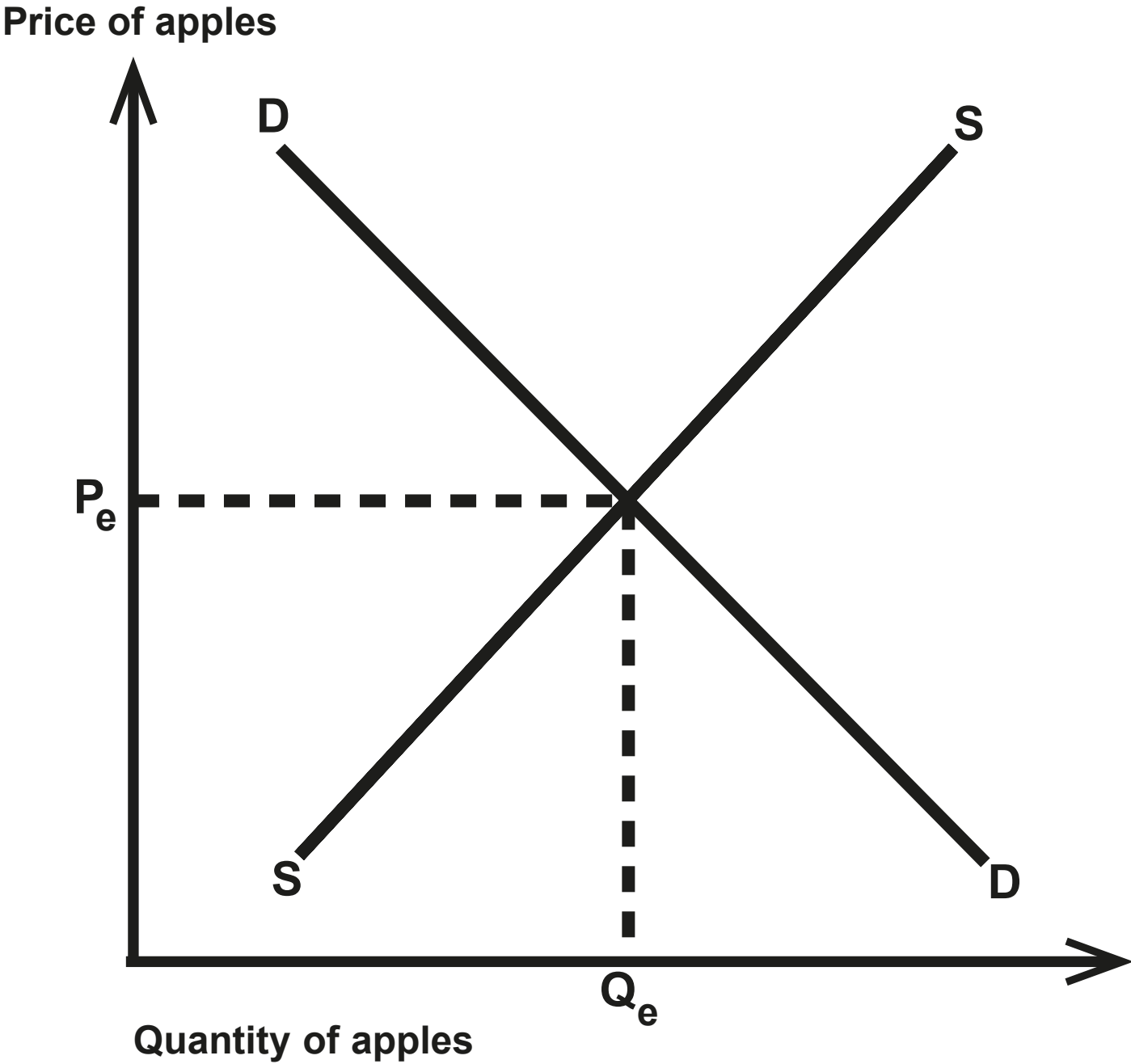
**THIS DATA BOOKLET MUST BE RETURNED WITH THE
QUESTION PAPER AT THE END OF THE EXAMINATION.**

Contents

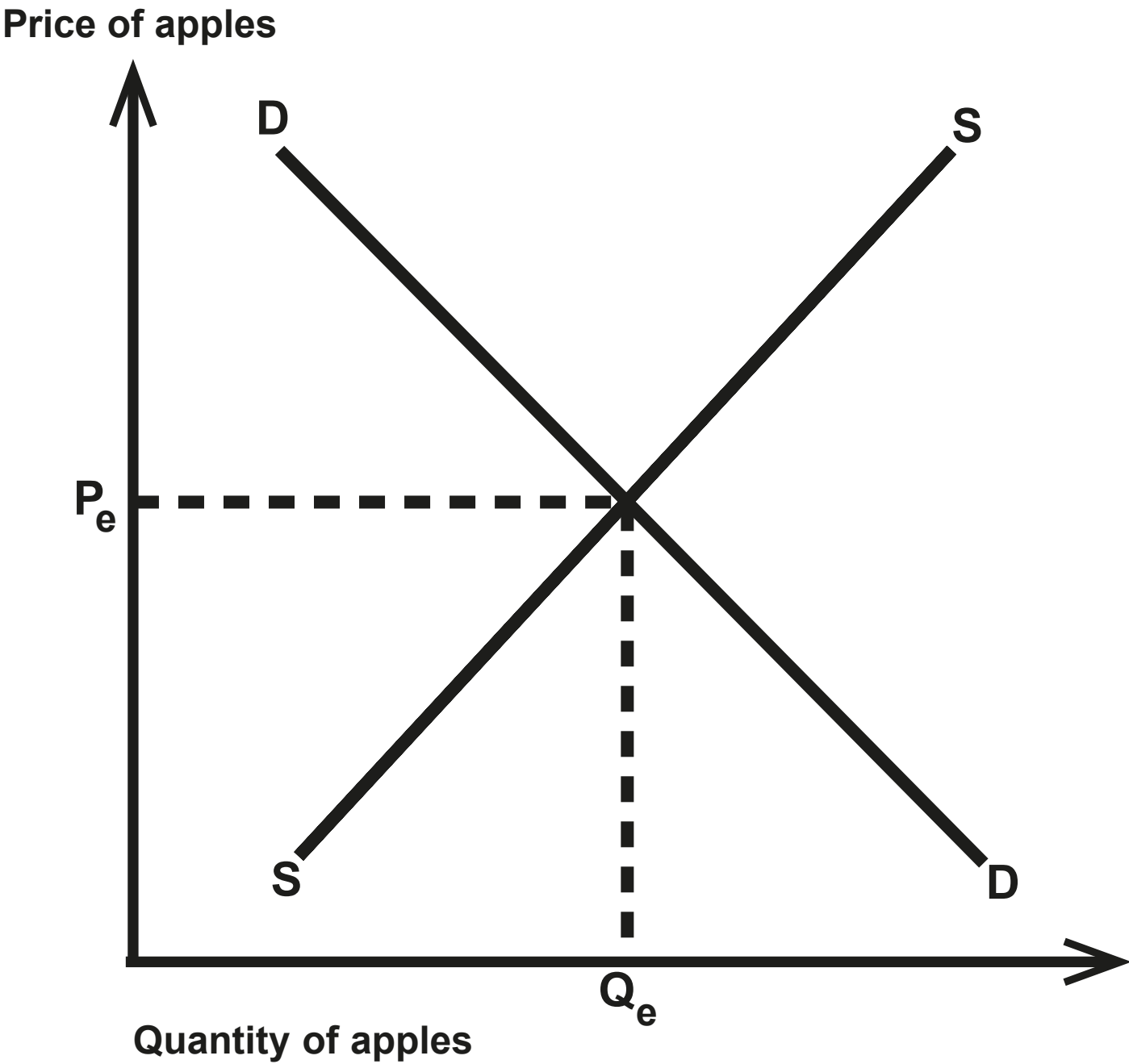
Page

| | |
|----|----------------------------|
| 4 | Question 1(g) |
| 5 | Question 1(g) (Spare copy) |
| 6 | Question 2(g) |
| 7 | Question 2(h) |
| 8 | Question 3(c) |
| 9 | Question 3(c) (Spare copy) |
| 10 | Question 3(d) |
| 11 | Question 3(e) |
| 12 | Question 4 |
| 13 | Question 4(c) |

Question 1(g)

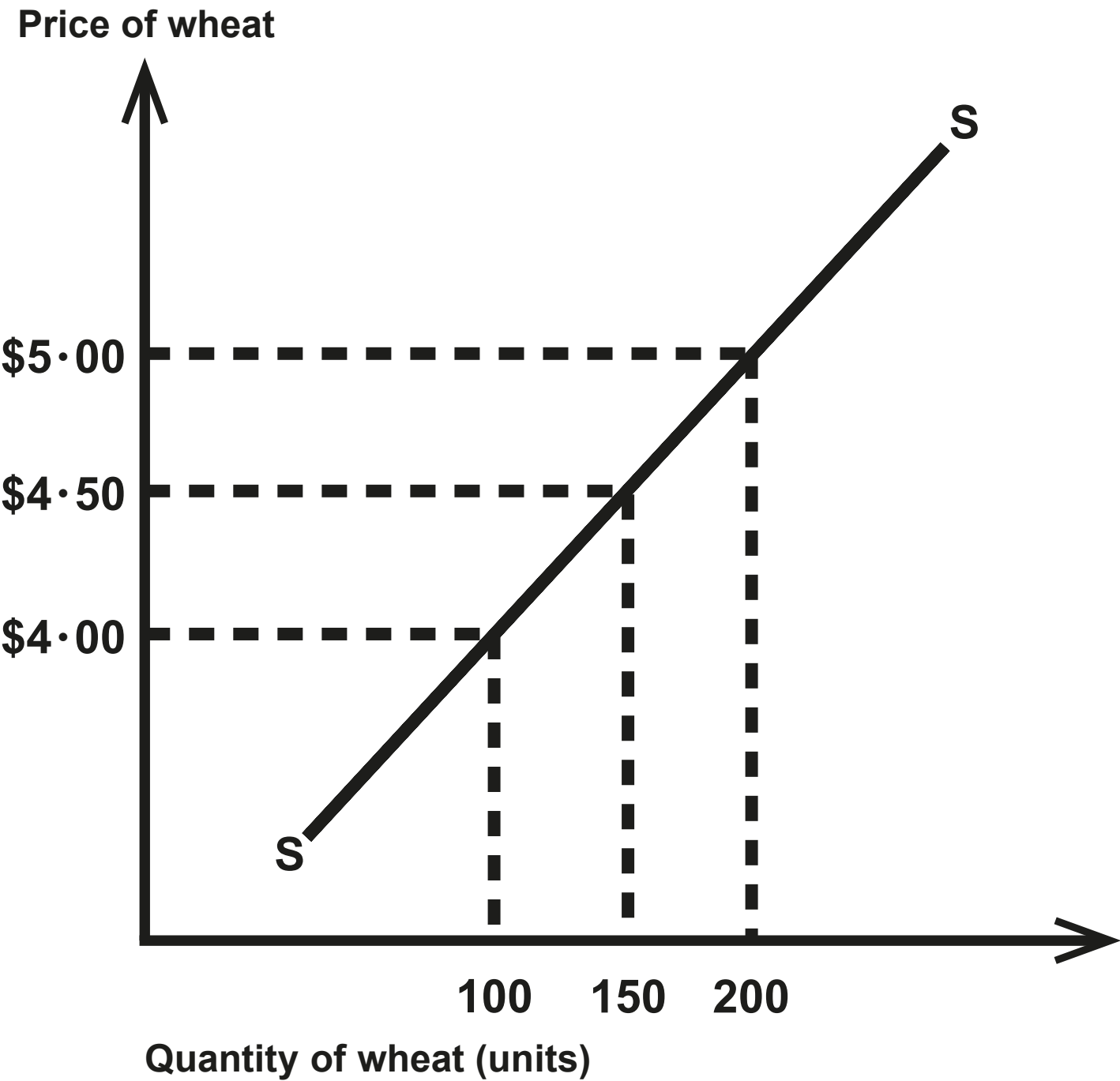


Question 1(g)



Question 2(g)

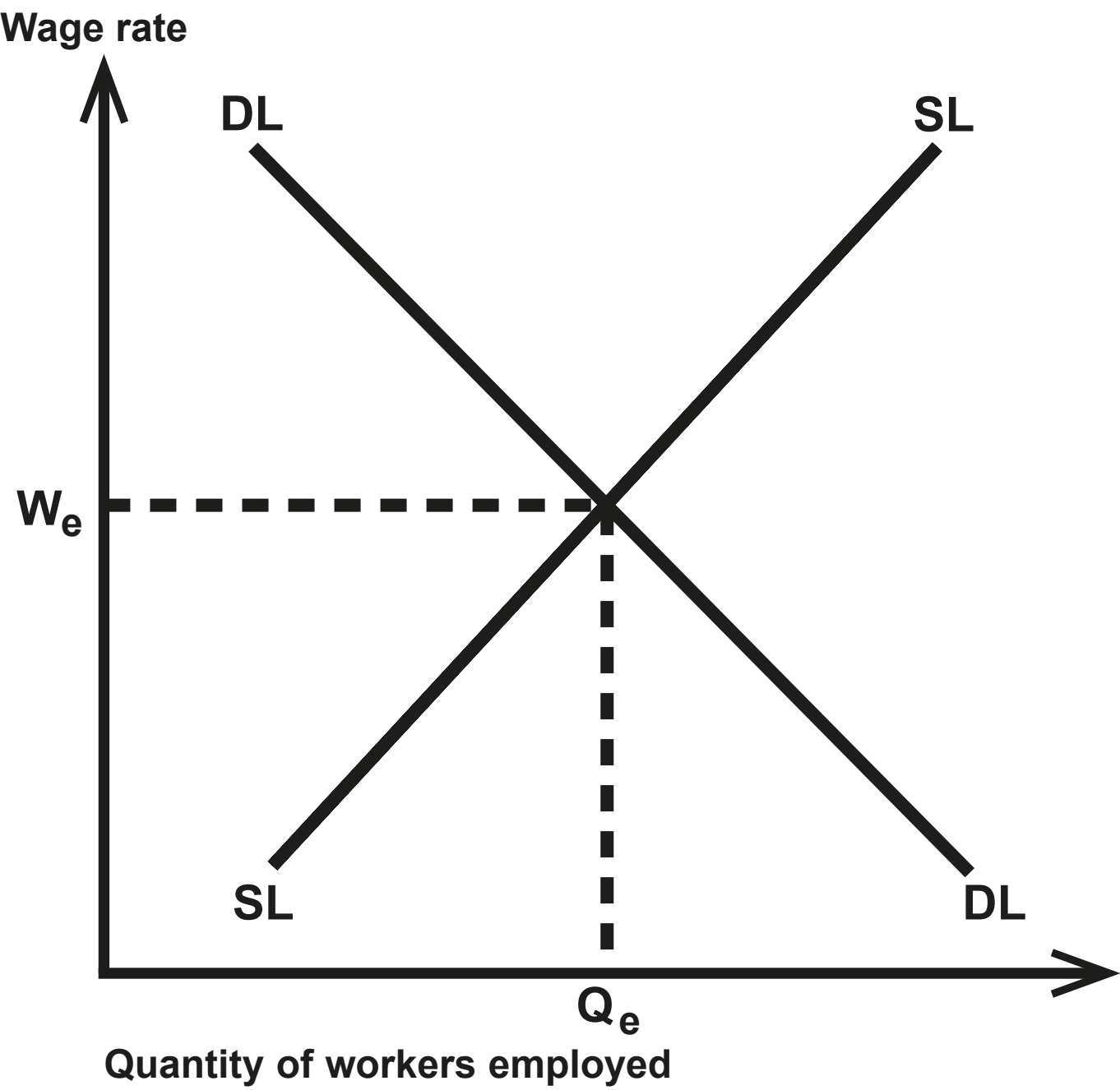
Supply of wheat in 2019



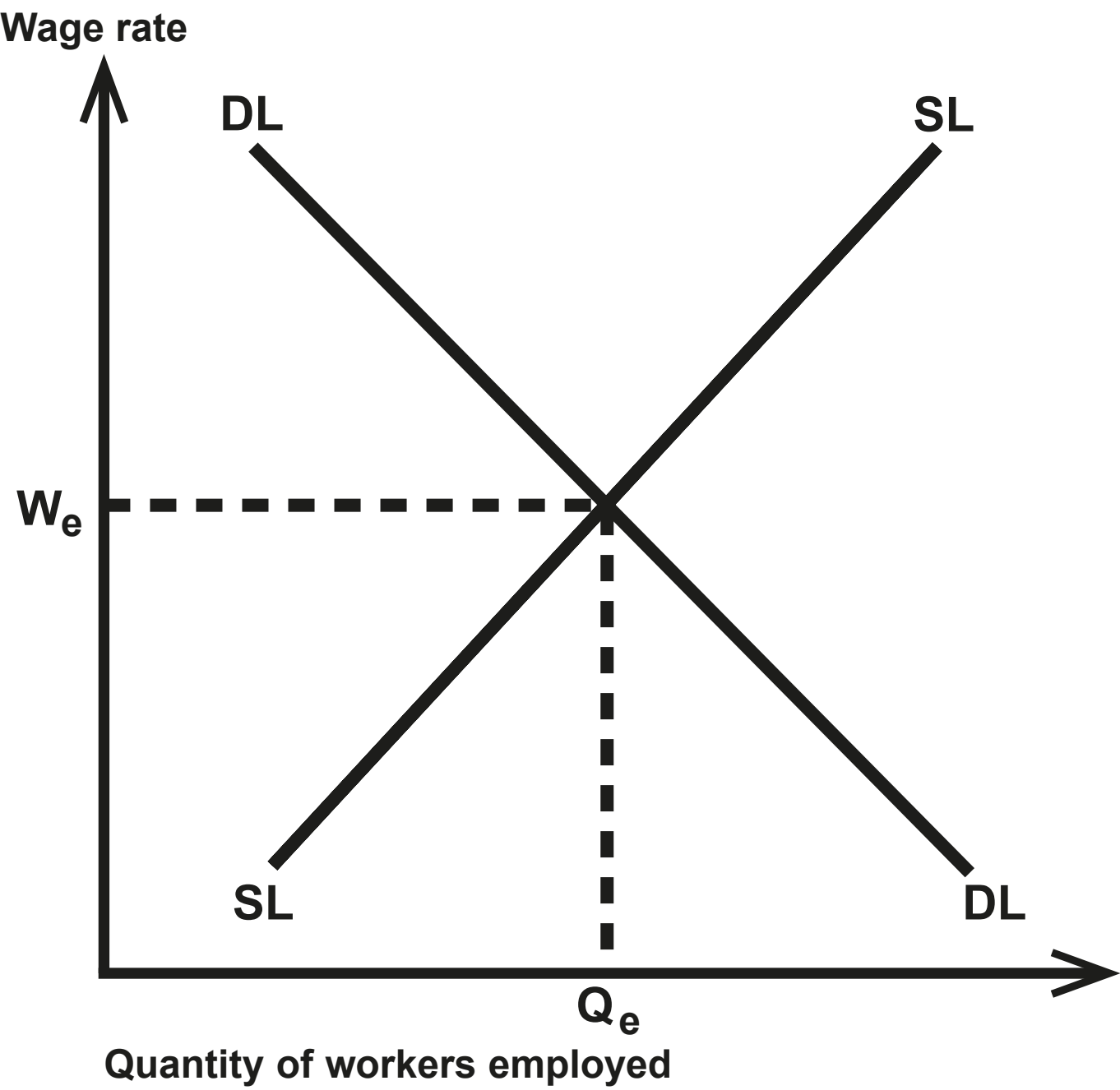
Question 2(h)

In England, there has been an increase in the number of science, maths and modern language graduates. Some of these graduates choose to enter the teaching profession with these qualifications. Many are encouraged to do so by a government bonus payment of £9 000, only available to graduates in these subjects. However, many do not stay in the profession for more than one or two years. This is due to problems of long working hours, bureaucracy and student behaviour. Those with science qualifications often find different types of employment quite easily.

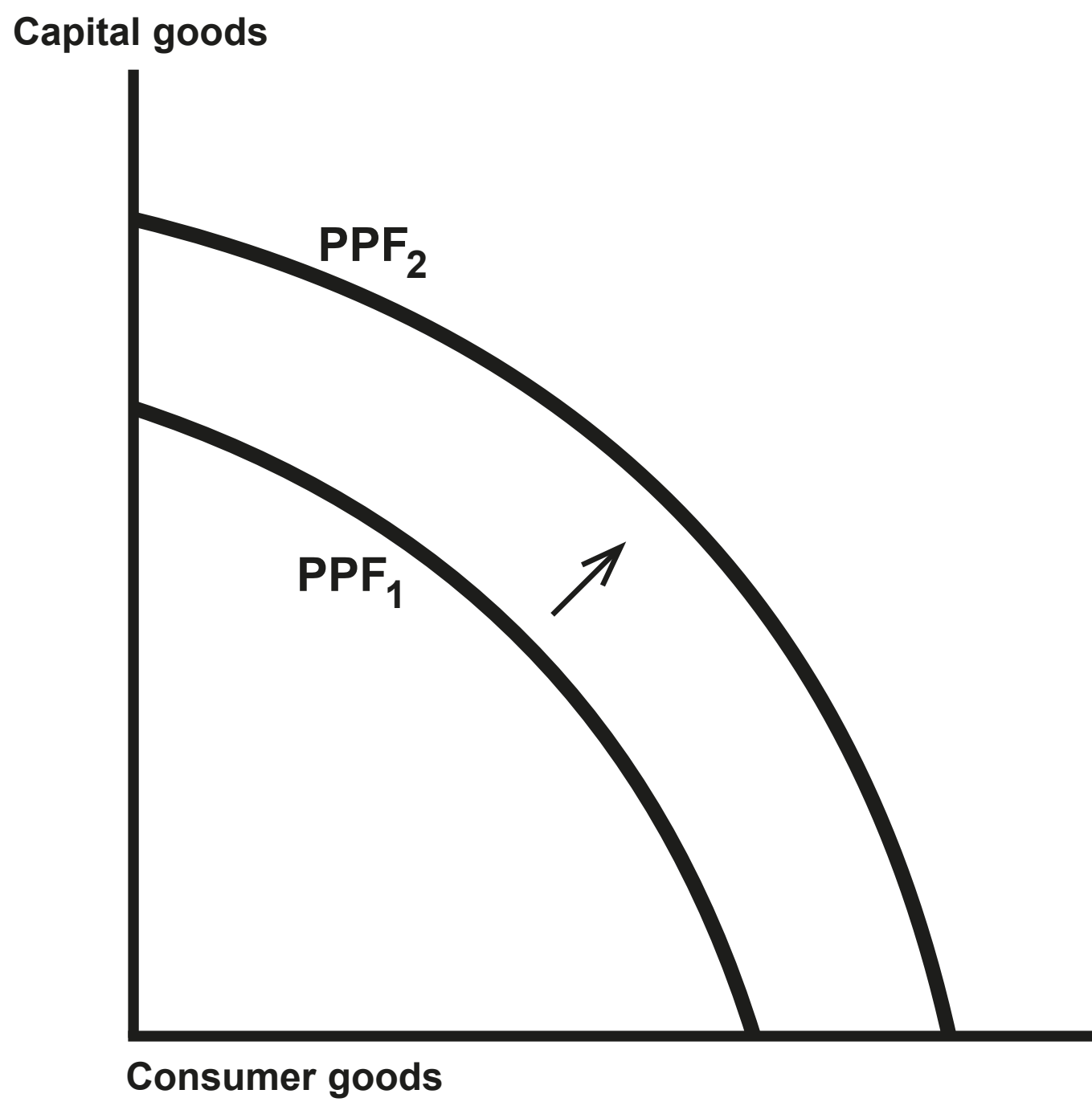
Question 3(c)



Question 3(c)



Question 3(d)



Question 3(e)

It is estimated that 23 billion bricks are made each year in Bangladesh. The industry employs over one million people. Demand for bricks is rising due to growth in the construction industry. The production of bricks contributes to the severe air pollution in the country by emitting smoke and dust clouds. Children, the elderly, pregnant women and those with a respiratory or heart condition may be especially affected by the poor air quality.

Question 4

| Evening | Quantity of seats demanded |
|----------|----------------------------|
| Thursday | 98 |
| Friday | 114 |
| Saturday | 107 |

Question 4(c)

The English city of Kingston upon Hull has an independent telecoms network known as Kingston Communications (KCOM). It is the only provider serving the city and its surrounding towns and villages. People living there do not have many broadband options. The network remained independent when most others joined together to become British Telecom (BT) and it has remained as a separate company to this day.

As well as broadband, KCOM also offers home phone and mobile deals which are available at a discounted price when purchased together. It will soon offer high-quality television packages. Its broadband is fast, with fibre optic packages which can reach impressive speeds of up to 250 Mb. However, these are not available everywhere in the region and KCOM's packages are more expensive than those in the rest of the country. This is especially true as they have low download limits.

Sources

Question 2(h)

(Source adapted from: <https://www.theguardian.com/education/2019/oct/05/science-and-language-teachers-to-get-9000-staying-on-bonus>)

Question 3(e)

(Source adapted from: <https://undark.org/2018/09/05/air-pollution-dhaka/>)

Question 4(c)

(Source adapted from: <https://www.broadbandchoices.co.uk/guides/broadband/hull-broadband>)